

**D**

**Question Booklet  
Serial No.**

**880001**



# **MAHAEXAM**

**PRE SECONDARY SCHOLARSHIP MOCK EXAMINATION - 2017**

**Medium : English**

**Subject : Third Language - Intelligence Test**

**Date : 05/02/2017 Time : 1.30 Hr. Std. : 8th Total Marks : 150**

***Instructions :***

- (1) This question paper will be of 75 questions carrying 2 marks each.
- (2) All questions are compulsory.
- (3) Each question will have Four alternatives. ①②③④
- (4) The answer sheet provided separately along with the question paper will have 4 circles ①②③④. Darken the correct alternative circle completely either with black or blue ink ballpen.  
For example, if the answer for a question is 2, the circle having 2 should be completely made black or blue like this ①●③④
- (5) Any of the answer coloured or marked as follows will get zero mark.  
① ② ③ ④
- (6) Answers marked in pencil will not be considered.
- (7) Answer once given cannot be changed.
- (8) Answers marked in more than one circle will not be considered.
- (9) Time limit of the examination is fixed. So if you do not know the answer to any of the questions, go to the next one. If time remains after attempting the final question attempt the questions left out.

**Subject : Third Language & Intelligence Test**

**Time : 01.30 pm to 3.00 pm**

## Question Paper

## PART - I : THIRD LANGUAGE

प्र.1 व प्र.3 : खालील उतारा वाचून त्याखाली विचारलेल्या प्रश्नांची उत्तरे लिहा.

काल सकाळी सहाच्या सुमारास मी बाबांबरोबर फिरायला गेलो होतो. पूर्वेकडून सूर्य वर येत होता. सूर्याची ती लालसर पिवळी किरणे किती वेगळी व छान दिसत होती. त्यांच्याकडे मी वारंवार पाहत होतो. सकाळचा तो गारवा किती छान वाटत होता. रस्त्यातल्या झाडांवर वेगवेगळे पक्षी बसलेले होते. त्यांचे वेगवेगळे आवाज कानांवर पडत होते. बाबा सकाळच्या मोकळ्या व शुद्ध हवेविषयी मला सांगत होते. खरंच त्या शुद्ध व मोकळ्या हवेचा अनुभव मला येत होता. रोज सकाळी लवकर उठण्याचा आणि फिरायला जाण्याचा अनुभव खूपच छान होता.

प्र.1 सूर्य कोठून वर येत होता?

- 1) झाडावरून                      2) पूर्वेकडून                      3) डोंगराकडून                      4) पश्चिमेकडून

प्र.2 पक्षी कोठे बसले होते?

- 1) पिंजऱ्यात                      2) गच्चीवर                      3) घरट्यात                      4) झाडांवर

प्र.3 सकाळची हवा कशी असते?

- 1) लालसर                      2) पिवळी                      3) मोकळी                      4) वेगळी

प्र.4 पु. ल. देशपांडे अष्टपैलू ..... होते.

- 1) शास्त्र                      2) समाजसेवक                      3) साहित्यिक                      4) गायक

प्र.5 त्यांनी आपल्या ..... मराठीचे दालन श्रीमंत केले.

- 1) लेखणीने                      2) शास्त्राने                      3) कलागुणाने                      4) प्रेमाने

प्र.6 पु. ल. देशपांडेची सर्वच ..... लोकप्रिय आहेत.

- 1) वाद्ये                      2) लोकसेवा                      3) प्रयोग                      4) पुस्तके

प्र.7 समानार्थी शब्दांची अयोग्य जोडी खालील पर्यायातून अचूक ओळखा.

- 1) डोळा - नेत्र                      2) कर्ण - पान                      3) बाहू - हात                      4) बोट - होडी

प्र.8 'नोकर' या शब्दांचा विरुद्धार्थी शब्द खालील पर्यायातून निवडा.

- 1) चाकर                      2) दास                      3) सेवक                      4) मालक

प्र.9 'परीक्षा ज्वल आल्यावर सर्व वीद्यार्थी अभ्यास करतात' या वाक्यात किती शब्द अशुद्ध आहेत तो पर्याय क्रमांक निवडा.

- 1) दोन                      2) चार                      3) तीन                      4) पाच

प्र.10 खाली दिलेल्या शब्दसमूहाबद्दल एक शब्द असणाऱ्या शब्दांच्या जोड्या दिल्या आहेत ; त्यातील चुकीची जोडी असणाऱ्या पर्यायाचे वर्तुळ रंगवा.

- 1) लिहिता वाचता येणारा - लेखक                      2) दुसऱ्यावर अवलंबून असलेला - परावलंबी  
3) बातमी आणून देणारा - वार्ताहर                      4) दुसऱ्यावर उपकार करणारा - परोपकारी

प्र.11 खालील वाक्यातील रिकाम्या जागी पर्यायातील योग्य वाक्प्रचार निवडा.


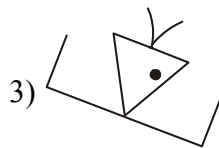
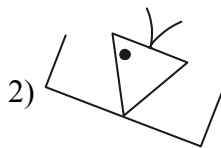
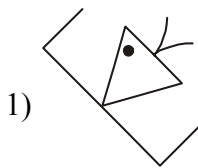
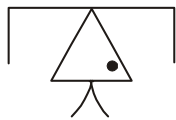
आपल्या गरजू मित्राला अमोलने .....

- 1) चालना देणे                      2) आव्हान देणे                      3) हात देणे                      4) दाद देणे

- प्र.12** 'नाकापेक्षा मोती जड' या म्हणीचा योग्य अर्थ असलेला पर्याय निवडा.  
 1) मालकापेक्षा नोकराची मिजास अधिक. 2) नाकाच्या आकारापेक्षा मोत्यांची किंमत जास्त.  
 3) लहान नाकात मोठा मोती घालणे. 4) आपल्या नाकास न शोभेल असे घालणे.
- प्र.13** पुढीलपैकी दोन शुद्ध शब्दांचा योग्य पर्याय क्रमांक ओळखा.  
 (1) उस्तव (2) विसर्जन (3) पोर्णिमा (4) शारीरिक  
 1) पर्याय क्र. 1 व 3 बरोबर 2) पर्याय क्र. 2 व 4 बरोबर  
 3) पर्याय क्र. 1 व 4 बरोबर 4) पर्याय क्र. 2 व 3 बरोबर
- प्र.14** खालील वाक्यातील रिकाम्या जोडशब्दांचा योग्य पर्याय निवडा.  
 आयुष्यात ..... खाल्याशिवाय हुशारी येत नाही.  
 1) जाडाभरडा 2) टक्केटोणपे 3) भाजीपाला 4) पोळीभाजी
- प्र.15** 'जलद' या शब्दाचे दोन वेगवेगळे अर्थ असलेला योग्य पर्याय निवडा.  
 1) पाणी - ढग 2) लवकर - पाणी 3) लवकर - घाईत 4) ढग - लवकर
- प्र.16** 'अंत' हा शब्द पुढीलपैकी कोणत्या पद्धतीने लिहिला तर बरोबर ठरतो तो अचूक पर्याय निवडा.  
 1) अत्न 2) अतं 3) अन्त 4) उनत
- प्र.17** 'तो झाडाखाली गाढ झोपला' या वाक्यातील अधोरेखित केलेल्या शब्दाची जात दिलेल्या पर्यायातून निवडा.  
 1) उभयान्वयी 2) शब्दयोगी 3) क्रिया विशेषण 4) केवलप्रयोगी
- प्र.18** पुढील गटातील दोन विशेषणे ओळखून त्याचा योग्य पर्याय क्रमांक निवडा.  
 1) हत्ती 2) दांडगा 3) जंगली 4) कुत्रा  
 1) पर्याय क्र. 2 व 3 बरोबर 2) पर्याय क्र. 1 व 2 बरोबर  
 3) पर्याय क्र. 3 व 4 बरोबर 4) पर्याय क्र. 1 व 4 बरोबर
- प्र.19** .....! केवढी गर्दी ही !  
 1) अरे रे 2) शाब्बास 3) अरे व्वा 4) अबब
- प्र.20** खालील पर्यायातून चुकीची विरुद्धलिंगी जोडी असलेला पर्याय निवडा.  
 1) नर - मादी 2) बंगला - बंगली 3) मालक - मालिका 4) मोर - लांडोर
- प्र.21** 'रंगबेरंगी फुलपाखरे' झाडावर उडत होती ?  
 या वाक्यातील अनेक वचनी नाम ओळखून त्याच्या एकवचनी पर्याय क्रमांक निवडा.  
 1) झाड 2) उडत 3) फुलपाखरू 4) होती
- प्र.22** 'चिमणी घरे बांधत होती.' या वाक्याचे वर्तमानकाळी वाक्याचा योग्य पर्याय ओळखा.  
 1) चिमणीने घरे बांधले. 2) चिमणी घरे बांधते. 3) चिमणी घरे बांधेल. 4) चिमणी घरे बांधत असेल.
- प्र.23** 'भारत माता की जय' या वाक्यात कोणते विरामचिन्ह आलेले आहे.  
 1) प्रश्नचिन्ह 2) एकेरी अवतरण चिन्ह 3) अर्धविराम 4) स्वल्पविराम
- प्र.24** महाराष्ट्रात मराठी भाषादिन म्हणून कोणता दिवस साजरा करण्यात येतो.  
 1) 15 ऑगस्ट 2) 1 मे 3) 5 सप्टेंबर 4) 27 फेब्रुवारी
- प्र.25** विंदा करंदीकर, यांनी कोणत्या साहित्यप्रकारात लेखन केले आहे तो अचूक पर्याय ओळखा.  
 1) कविता 2) प्रवासवर्णन 3) कादंबरी 4) नाटक

**PART - II : INTELLIGENCE TEST**

- Q.26** In the word 'NAGARPARISHAD' which pair of letters occurs at the same distance from the middle letter of the given word?  
 1) D, G                      2) N, H                      3) G, H                      4) R, P
- Q.27** Which is the middle letter of the word formed from the group of letters 'OENSI'?  
 1) S                      2) I                      3) N                      4) O
- Q.28** In a jungle safari we saw fawn, cub and colt. In this sentence which animal's young one is not mentioned?  
 1) Deer                      2) Tiger                      3) Horse                      4) Elephant
- Q.29** ABCDE FGHIJ KLMNO PQRST UVWXY  
 In the above series which is eleventh letter to the left of the ninth letter to the right of the middle letter?  
 1) L                      2) I                      3) K                      4) J
- Q.30** ABCDE FGHIJ KLMNO PQRST UVWXY  
 In the above series if the letters from G to W are written in reverse order then which is the eighth letter from the right end ?  
 1) O                      2) M                      3) N                      4) P
- Q.31** Find the odd man out.  
 1) Tabla                      2) Guitar                      3) Violin                      4) Santoor
- Q.32** Find the figure which does not belong to the group.



**Q.33** Find the number which does not belong to the group.

- 1) 284                      2) 2244                      3) 808                      4) 8412

**Q.34** Find the number which does not belong to the group.

- 1)  $\frac{12}{20}$                       2)  $\frac{27}{36}$                       3)  $\frac{21}{28}$                       4)  $\frac{18}{24}$

**Q.35** ABCDE FGHIJ KLMNO PQRST UVWXY

Observe the above series and find the odd man out.

- 1) FI                      2) GP                      3) EH                      4) IT

**Q.36 to Q.40 :** There is a certain relationship between the first and second term. The same relationship exists between the third and fourth term. Find the relation and choose the correct alternative.

**Q.36** Dussehra : Ashwin : : Ganesh Chaturthi : ?

- 1) Bhadrapad                      2) Shravan                      3) Chaitra                      4) kartik

**Q.37**

1) 2) 3) 4)

**Q.38** 47 : 53 :: 59 : ?

- 1) 61                      2) 67                      3) 69                      4) 71

**Q.39** 67 : 21 :: 89 : ?

- 1) 35                      2) 34                      3) 36                      4) 72

**Q.40** Observe the relation and find out the alternative which replaces the question mark ?

ABCDE FGHIJ KLMNO PQRST UVWXY

CH : 24 :: BX : ?

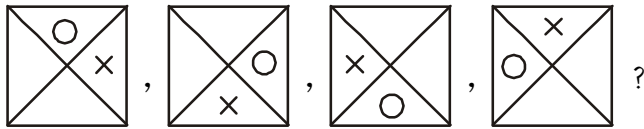
- 1) 26                                      2) 48                                      3) 44                                      4) 38

**Q.41** Find out the number which replaces the question mark ?

91, 78, 66, 55, ?

- 1) 44                                      2) 36                                      3) 43                                      4) 45

**Q.42** Find out the figure which replaces the question mark ?



- 1)      2)      3)      4)

**Q.43** Observe the sequence and find out the group of symbols which replaces the question mark ?

□○★★-○□□○-★★□○-○★★□○

- 1) □○★                                      2) □★○                                      3) □★★                                      4) □★□

**Q.44** Find out the terms which does not belong to the series. (Find two wrong options)

2, 3, 10, 15, 25, 37, 50

- 1) 2                                      2) 25                                      3) 37                                      4) 15

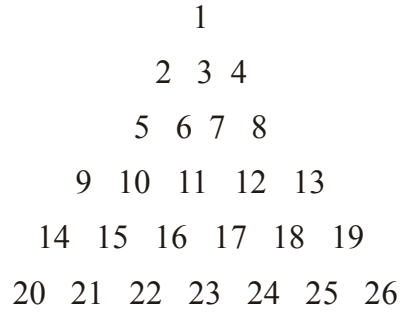
**Q.45** Find out the letter which replaces the question mark ?

8, 12, 18, 25, 36, 48

- 1) 36                                      2) 18                                      3) 12                                      4) 25

- Q.46** Find out the letter which replaces the question mark ?  
 ABCDE FGHIJ KLMNO PQRST UVWXY  
 A, D, I, P, ?  
 1) W                                      2) X                                      3) V                                      4) Y
- Q.47** In a code the word HEN is written as RUL. How will you write the word SIT in this code ?  
 1) GQF                                      2) GPF                                      3) GQE                                      4) HQI
- Q.48** In a code if CAT = 532, TOP = 374, PAN = 872, then POT = ?  
 (The order of letter and digits may not be same)  
 1) 743                                      2) 873                                      3) 472                                      4) 872
- Q.49** In a code, INK = ⊗△□ and DOG = ⊠▽○. Then which word is represented by symbols ⊠⊗○?  
 1) DOG                                      2) DON                                      3) NOD                                      4) DIG
- Q.50** M\_\_OM\_\_ NOMMN\_\_ MM\_\_OM  
 In the following rhythmic arrangement of letters, which letters replace the question mark ?  
 1) MMON                                      2) NMON                                      3) OMNN                                      4) NOMN
- Q.51** In the following rhythmic arrangement of symbols, which alternative replace the question mark ?  
 ★★○△\_\_△○★\_\_★○\_\_△△\_\_★★★○△  
 1) △○★○                                      2) △★△○                                      3) ★○△△                                      4) △★○△
- Q.52** Which number will replace the question mark ?  
 55\_\_39\_\_643\_\_28  
 1) 748                                      2) 718                                      3) 477                                      4) 717

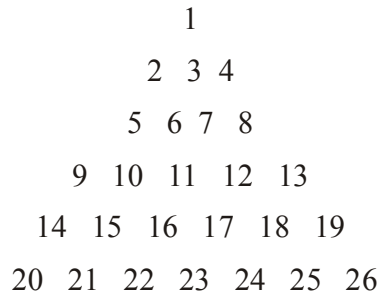
**Q.53** Study the pyramid and answer the question.



14915 : 191318 :: 526 : ?

- 1) 847                      2) 437                      3) 846                      4) 837


**Q.54** Study the pyramid and answer the question.



9152216 : 13182417 :: 10222114 : ?

- 1) 12172419                      2) 7171819                      3) 12232418                      4) 12242519

**Q.55** Study the pyramid and find the correct answer.



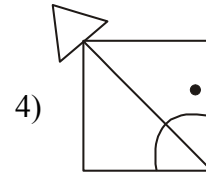
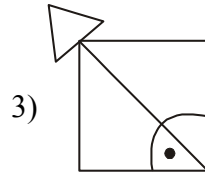
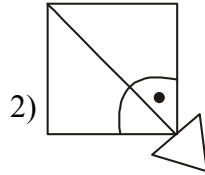
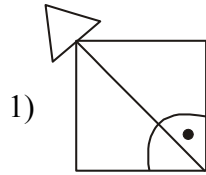
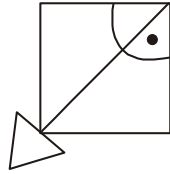
If glrh : jnsi then klde : ?

- 1) onie                      2) onfe                      3) otjf                      4) Jice



**Q.56** Find out the water reflection of a question figure from the given answer figures.

Water figure



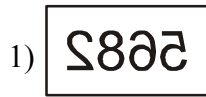
**Q.57** Find out the water reflection of a question figure from the given answer figures.

Water figure



**Q.58** Find out the mirror image of the question figure.

Mirror image



**Q.59** Ajit's age is thrice of Suyash's age. If the difference between their age is 20 years. What is the sum of their ages?

1) 38 years

2) 60 Years

3) 30 years

4) 40 years

**Q.60** Kavita has two sisters and one brother. Her brother's name is Akshay. Then how many sisters does Akshay have?

1) two

2) three

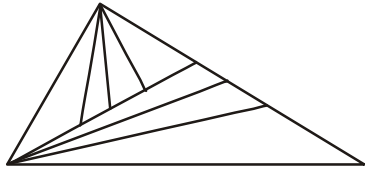
3) one

4) four

**Q.61** A tower clock gives as many strokes as the number of hours. It gives one stroke every half an hour. From quarter to three at noon to quarter past seven in the evening, how many strokes are given by the clock.

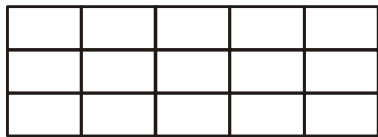
- 1) 30                                      2) 28                                      3) 29                                      4) 31

**Q.62** How many triangles are there in the adjoining figure?



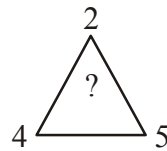
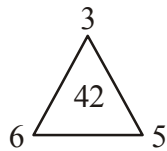
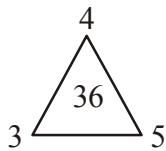
- 1) 18                                      2) 19                                      3) 20                                      4) 12

**Q.63** How many rectangles are there in the adjoining figure?



- 1) 63                                      2) 84                                      3) 98                                      4) 90

**Q.64** Which number will replace the question mark in the following figures ?



- 1) 22                                      2) 48                                      3) 30                                      4) 33

**Q.65** In a queue of 35 students Rajendra is standing in the middle. Then what is Deepak's place who is standing left to Rajendra ? (Select two options)

- 1) 19<sup>th</sup> from right      2) 19<sup>th</sup> from left      3) 17<sup>th</sup> from right      4) 17<sup>th</sup> from left

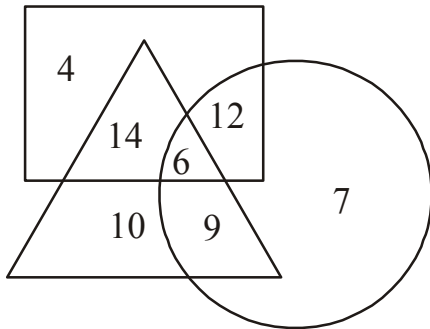
**Q.66** Suyash, Pradip, Sujal and Pratik are playing Caram. Pradip and Sujal are facing each other. Pratik is sitting to Sujal's left. If Suyash is facing towards East, then who is facing towards North ?

- 1) Suyash                      2) Pradip                      3) Sujal                      4) Pratik

**Q.67** Suraj is Younger than Savita by 5 days. Savita is older than Sanjay by 15 days. If Sanjay is born on 18<sup>th</sup> May. Then which of the following statements are true ? (Select two correct options)

- 1) Savita was born on 3<sup>rd</sup> June.                      2) Suraj was born on 8<sup>th</sup> May.  
3) Suraj was born on 28<sup>th</sup> June.                      4) Suraj is older than Sanjay.

**Q.68** Observe the following Venn diagram and find out the sum of the digits which are these in the one figure only.



- 1) 17                      2) 26                      3) 21                      4) 14

**Q.69** Which option represents the Venn diagram correctly.



- 1) Cow, Buffalo, Goat                      2) Insect, Housefly, Fish  
3) Pune, Maharashtra, Sangali                      4) Village, Taluka, District

**Q.70** Find the number which replaces the question mark in the following figure.

8	112	7
6	60	5
9	?	4

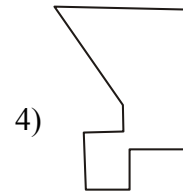
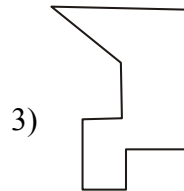
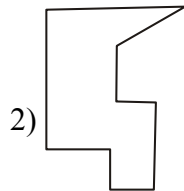
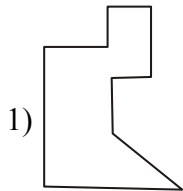
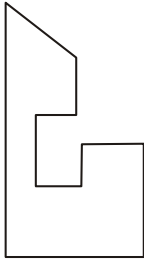
1) 72

2) 172

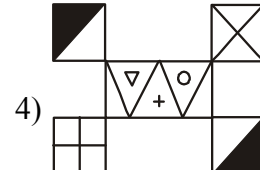
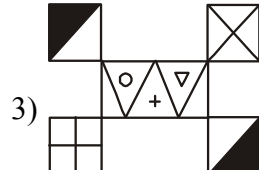
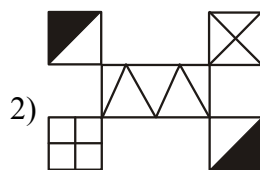


3) 81

4) 93

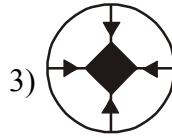
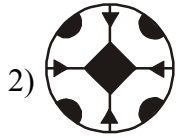
**Q.71** Choose the correct alternative from the answer figures to complete the following question figure.



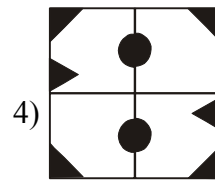
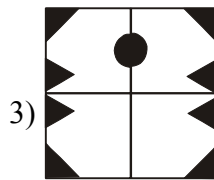
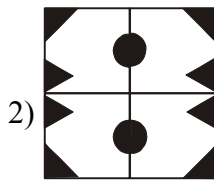
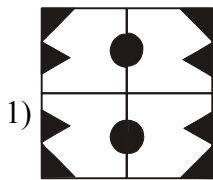
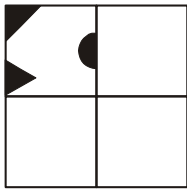
**Q.72** Find out the answer figure that is identical to the question figure.



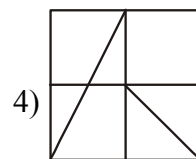
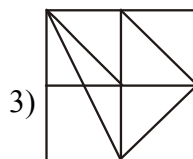
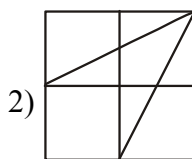
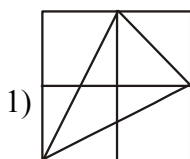
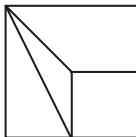
**Q.73** The shaded part is cut and the paper is folded. how will the paper look like when the final fold is unfolded ?



**Q.74** The shaded part is cut and the paper is folded. How will the paper look like when the final fold is unfolded ?



**Q.75** The question figure is hidden in one of the answer figure. Find the correct answer figure.



**Rough Work**