

D

**Question Booklet
Serial No.**

440001



MAHAEXAM

PRE UPPER PRIMARY SCHOLARSHIP MOCK EXAMINATION - 2017

Medium : English

Subject : Third Language & Intelligence Test

Date : 5/02/2017 Time : 1.30 Hr. Std. : 5th Total Marks : 150

Instructions :

- (1) This question paper will be of 75 questions carrying 2 marks each.
- (2) All questions are compulsory.
- (3) Each question will have Four alternatives. ①②③④
- (4) The answer sheet provided separately along with the question paper will have 4 circles ①②③④. Darken the correct alternative circle completely either with black or blue ink ballpen.
For example, if the answer for a question is 2, the circle having 2 should be completely made black or blue like this ①●③④
- (5) Any of the answer coloured or marked as follows will get zero mark.
① ② ③ ④
- (6) Answers marked in pencil will not be considered.
- (7) Answer once given cannot be changed.
- (8) Answers marked in more than one circle will not be considered.
- (9) Time limit of the examination is fixed. So if you do not know the answer to any of the questions, go to the next one. If time remains after attempting the final question attempt the questions left out.

Subject : Third Language & Intelligence Test

Time : 01.30 pm to 03.00 pm

Question Paper

PART - I : THIRD LANGUAGE

प्र.1 व प्र.3 : खालील कविता वाचून त्या खाली विचारलेल्या प्रश्नांची उत्तरे लिहा.

कोंबडेदादा

कोंबडे दादा उठा.....उठा

पहाट झाली आरवत सुटा ।

जागा व्हायला सगळा गाव

कुकुच कू..... करायचे राव ।

रोज पहाटे आरवत रहा

डोक्यावर तुरा मिरवत रहा ।

प्र.1 कवितेमध्ये कवीने उठा, उठा, असे कोणास म्हटले आहे?

1) पोपट दादा

2) चिमणीताई

3) कोकिळा बाई

4) कोंबडे दादा

प्र.2 कवितेमध्ये कोंबड्याच्या ओरडण्यासाठी कोणता शब्द आलेला आहे?

1) हंबरणे

2) डरावणे

3) आरवणे

4) ओरडणे

प्र.3 कोंबडा डोक्यावर काय घालून मिरवतो?

1) मुकुट

2) तुरा

3) टोप

4) पिसे

प्र.4 व प्र.6 : खालील संवाद काळजीपूर्वक वाचा व त्याखाली विचारलेल्या प्रश्नांची उत्तरे लिहा.

“मुलांनो, सगळे भरभर चाला, परिपाठाच्या आधी केंद्र शाळेत पोचायला पाहिजे. स्पर्धा सुरू होतील लगेचच.”

पुढे गेलेल्या बाई मागे वळत म्हणाल्या. केंद्रस्तरीय खेळाच्या स्पर्धेसाठी त्या मुलांना घेऊन निघाल्या होत्या.

मयूर म्हणाला, “मी डब्यात गुळाची पोळी आणलीय”

“मी अंड्याची पोळी आणि चपाती आणलीय, जया म्हणाली.

“माझ्या डब्यात फोडणीची पोळी आहे” सायना

“अरे व्वा ! सर्वांच्या डब्यात पोळीचे वेगवेगळे प्रकार आहेत. पण मला मात्र उपाशीच राहावं लागणार बहुतेक.

मी माझा डबा घरीच विसरलो. अभिजित चिंतेने म्हणाला. “का? आम्ही आहोत की,” सायना व जया एकदम बोलल्या.

“आणि मी पण” मयूर म्हणाला.

बोलत बोलत सगळे केंद्रशाळेच्या दारात आले व बाईंनी हुश्र केले.

प्र.4 हा संवाद कोठे घडला आहे?

1) मैदानात

2) शाळेत

3) रस्त्यात

4) वर्गात

- प्र.5** डबा घरीच विसरून कोण आला होता?
- 1) अभिजित 2) सायना 3) मयूर 4) जया
- प्र.6** 'केंद्र शाळेच्या दारात पोहचल्यावर बाईनी हुश्र केले?
- या वाक्यातील 'हुश्र करणे' या वाक्प्रचाराचा योग्य अर्थ निवडा.
- 1) लक्षपूर्वक पाहणे 2) विचारत पडणे 3) आश्चर्य वाटणे 4) मोकळा श्वास घेणे
- प्र.7** खालील पर्यायातून समानार्थी नसलेला शब्द ओळखा?
- 1) नगर 2) खेडे 3) ग्राम 4) गाव
- प्र.8** 'निरोगी' या शब्दांच्या विरुद्धार्थी असलेला शब्द ओळखा?
- 1) उपयोगी 2) निरुपयोगी 3) अरोगी 4) रोगी
- प्र.9** खालील शब्दसमूहाबद्दल योग्य शब्द निवडा.
- 'आंब्यांच्या झाडांची बाग'
- 1) आमराई 2) वनराई 3) आप्रतरु 4) आप्रवृक्ष
- प्र.10** चुकीची ध्वनिदर्शक जोडी ओळखा?
- 1) झऱ्याची - झुळझुळ 2) ओढयाचा - लखलखाट
3) थेंबाची - टपटप 4) पावसाची - रिपरिप
- प्र.11** 'जंगलातील प्राणी करून राहतात.'
- या वाक्यातील रिकाम्या जागी योग्य समूहदर्शक शब्द निवडा.
- 1) गट 2) कळप 3) जमाव 4) घोळका
- प्र.12** 'कोंबडी'चे घर दर्शवणारा शब्द ओळखा.
- 1) घरटे 2) पिंजरा 3) खुराडे 4) घर
- प्र.13** 'नवल वाटणे' या वाक्प्रचारासारखा समान अर्थ असणारा दुसरा वाक्प्रचार निवडा.
- 1) तोंडात बोटे घालणे 2) तोंड घशी पडणे 3) तोंडचे पाणी पळणे 4) तोंड फिरवणे
- प्र.14** खालील वाक्यातील अर्थासाठी योग्य म्हण निवडा.
- 'बलवान माणूस इतरांवर हुकूमत गाजवतो.'
- 1) तळी राखी तो पाणी चाखी 2) काखेत कळसा, गावाला वळसा
3) बळी तो कान पिळी 4) गाढवाला गुळाची चव काय?

- प्र.15** पुढील वाक्यातील अधोरेखित शब्द ज्या अर्थाने वापरला आहे त्या अर्थाचा शब्द निवडा.
हल्ली घरांचे भाव खूपच वाढले आहेत ?
1) भावना 2) दर्जा 3) भाऊ 4) दर
- प्र.16** जसे 'एकटा दुकटा' तसे 'अंगत' या शब्दाचा जोडशब्द तयार होण्यासाठी योग्य शब्दाच्या पर्याय क्रमांकाचे वर्तुळ रंगवा.
1) संगत 2) पंगत 3) रंगत 4) मंगत
- प्र.17** पुढील अक्षरांपासून तयार होणाऱ्या अर्थपूर्ण शब्दातील मधले अक्षर कोणते ?
र फ चं द स
1) द 2) स 3) फ 4) र
- प्र.18** मधमाशा फुलातील गोळा करतात. रिकाम्या जागी योग्य नाम ओळखा.
1) मध 2) पाकळ्या 3) पराग 4) कण
- प्र.19** 'हत्ती सोंडेने पाणी उडवितो' या वाक्यातील क्रियापद ओळखा ?
1) हत्ती 2) सोंड 3) पाणी 4) उडवितो
- प्र.20** खालील पर्यायातील नपुसकलिंगी शब्दाचा पर्याय ओळखा ?
1) वाडी 2) खेडे 3) खोडी 4) खाडी
- प्र.21** खाली दिलेल्या पर्यायांतील वचनानुसार चुकीची जोडी निवडा.
1) पुस्तक - पुस्तके 2) पिशवी - पिशव्या 3) गुलाब - गुलाबी 4) रांगोळी - रांगोळ्या
- प्र.22** 'झाडे लावा प्रदूषण कमी करा' या वाक्याच्या शेवटी कोणत्या विरामचिन्हाचा वापर केला पाहिजे.
1) स्वल्पविराम 2) प्रश्नचिन्ह 3) उद्गार चिन्ह 4) पूर्ण विराम
- प्र.23** शुद्ध शब्द ओळखा ?
1) अवषध 2) अवशद 3) औषध 4) ओषध
- प्र.24** साने गुरुजींनी लिहिलेले प्रसिद्ध पुस्तक कोणते ?
1) गीताई 2) श्यामची आई 3) माझी आई 4) गीता रहस्य
- प्र.25** 'शिक्षकदिन' म्हणजे खालीलपैकी कोणता दिवस ?
1) 7 डिसेंबर 2) 5 सप्टेंबर 3) 5 जून 4) 8 सप्टेंबर

PART - II : INTELLIGENCE TEST

Q.26 'M,O,S,C,H,T,A' arrange these letters to get a meaningful word and write the third letter from the left.
 1) O 2) M 3) A 4) C

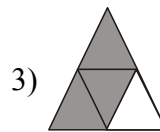
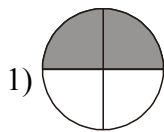
Q.27 How many vowels are there in the sentence 'Bhagatsingh was a brave warrior.' ?
 1) 10 2) 9 3) 16 4) 26

Q.28 How many prime numbers are there in the following number series ?
 7, 8, 3.4, 5, 6, 8, 4, 9, 8, 6, 2
 1) 3 2) 4 3) 2 4) 5

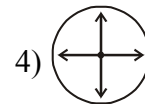
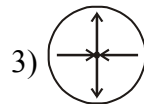
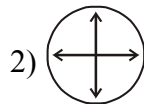
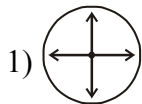
Q.29 ABCDE FGHIJ KLMNO PQRST UVWXYZ
 In the above series which is the 21st letter from left ?
 1) P 2) E 3) Q 4) U

Q.30 Find the odd one out.
 1) calf 2) lamb 3) wolf 4) cub

Q.31 Find the figure does not belong to the group.



Q.32 Find the figure does not belong to the group.



Q.33 Find the odd one out.
 1) 20 2) 37 3) 45 4) 50

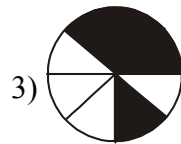
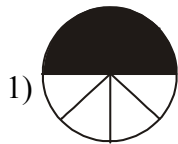
Q.34 Find the odd one out.
 1) 7359 2) 5897 3) 9785 4) 8579

Q.35 Observe the sequence of number series and find out the number in place of question mark.

4, 9, 14, 19, 24, 29, ?

- 1) 32 2) 34 3) 36 4) 39

Q.36 Which figure will be come in place of question mark ?



Q.37 Find out the group of symbols which will replace the question mark in the given series.

+□○×△+□○?△+□?×△+?○×△

- 1) ×□○ 2) ×+□ 3) ×○□ 4) ×△□

Q.38 Find out the wrong term from given number series.

1, 3, 8, 18, 35, 60, 98

- 1) 60 2) 18 3) 35 4) 98

Q.39 Find out the wrong term from given number series.

1, 4, 10, 16, 25, 36

- 1) 10 2) 25 3) 36 4) 16

Q.40 Savita is not as tall as Kavita but taller than Suvarna. Babita is taller than Kavita. Then who is the shortest ?

- 1) Kavita 2) Savita 3) Suvarna 4) Babita

Q.41 If eye is called as ear, ear as skin, skin as tongue, tongue as nose. Then how do we get the sense of touch ?

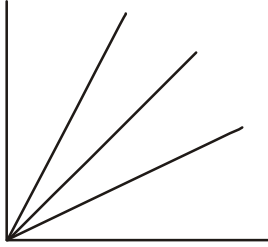
- 1) Skin 2) Ear 3) Nose 4) Tongue

Q.42 Seema is 5 year old before six years. Then how old will be Seema after 6 years?

- 1) 17 2) 11 3) 12 4) 10

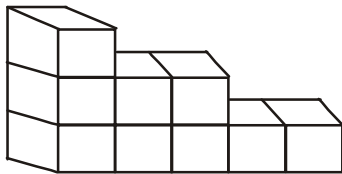
- Q.43** Pointing towards the person in the photo frame Riya said, "This is my mother's sister's son's uncle." Then what is the relation of that person to Riya ?
- 1) Maternal Uncle-nephew
 - 2) Uncle- niece
 - 3) Maternal uncle- niece
 - 4) Grandfather-Granddaughter

- Q.44** How many angles are there in the following figure ?



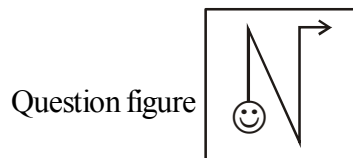
- 1) 4
- 2) 6
- 3) 7
- 4) 10

- Q.45** How many cubes are there in a figure ?



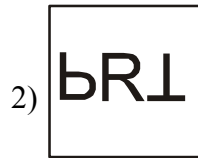
- 1) 8
- 2) 9
- 3) 7
- 4) 18

- Q.46** Find the water reflection of the given question figure.

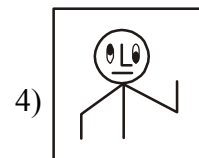
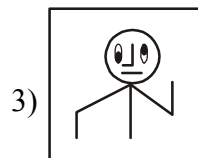
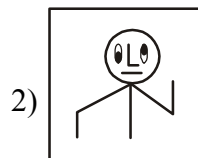
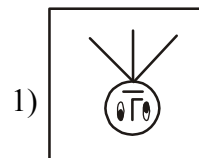
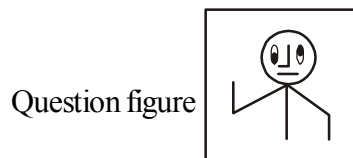


- 1)
- 2)
- 3)
- 4)

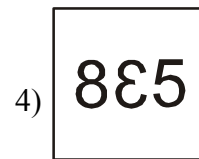
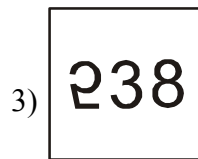
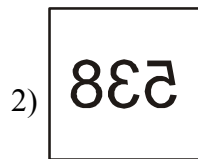
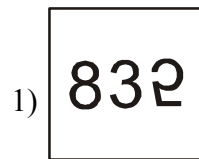
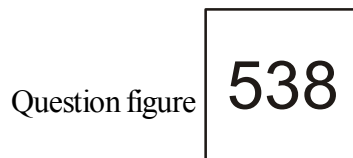
Q.47 Find the water reflection of the given question figure.



Q.48 Find the mirror image of the given question figure.



Q.49 Find the mirror image of the given question figure.



Q.50 to Q.54 : There exists a certain relationship between first and second term. The same relationship exists between third and fourth term. Find the correct alternative.

Q.50 Hen : Coop :: Horse : ?

- 1) Shed 2) Stable 3) Cave 4) Cage

Q.51 Raigad : Raigad :: Shivneri : ?

- 1) Satara 2) Ahamadnagar 3) Pune 4) Nashik

Q.52 

- 1)  2)  3)  4) 

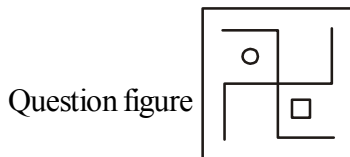
Q.53 31 : 41 :: 53 : ?

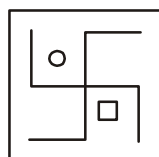
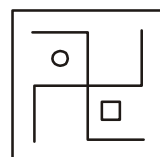
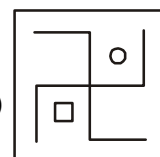
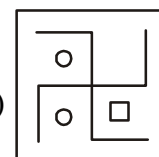
- 1) 64 2) 67 3) 61 4) 59

Q.54 9 : 82 :: 6 : ?

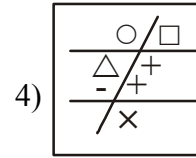
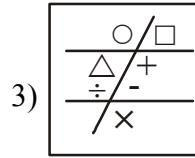
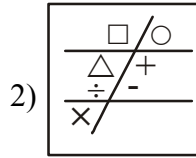
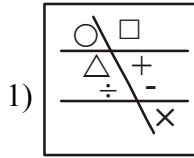
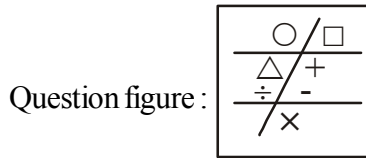
- 1) 35 2) 54 3) 37 4) 53

Q.55 Find out the answer figure that is identical to question figure.



- 1)  2)  3)  4) 

Q.56 Find out the answer figure that is identical to question figure.



Q.57 Seema's position in a row is 23rd from left and 17th from right. Then what is the position of salma who is standing in the middle of the row?

- 1) 20 2) 19 3) 39 4) 21

Q.58 These are 73 pictures of tiger, lion, elephant, camel, horse, and cow respectively arranged in sequence on a wall. Then which animal will be there on the 44th number ?

- 1) Tiger 2) Elephant 3) Horse 4) Lion

Q.59 Observing sunset Apurva turns thrice in a right angle to her left. Then which direction she will face to her right ?

- 1) West 2) East 3) North 4) South

Q.60 Samir was facing south when he left home. He walked 6 feet and turned in right angle to his left. Again he walked 10 feet and turned right in a right angle and was facing the temple's door. Then temple's door is in which direction ?

- 1) South 2) North 3) East 4) West

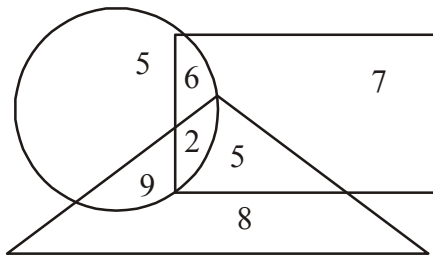
Q.61 12th May 2016 was Wednesday. Then on what day will be the Independence day in the same year ?

- 1) Saturday 2) Monday 3) Sunday 4) Tuesday

Q.62 3rd August is Tuesday. Then in that month which of the following days will appear five times ?

- 1) Monday, Tuesday 2) Sunday, Monday, Tuesday
3) Sunday, Monday 4) Monday, Tuesday, Wednesday

Q.63 Observe the Venn diagram and answer the following question. What is the sum of the digits which are there only in one diagram.



- 1) 20 2) 15 3) 13 4) 26

Q.64 Find out the missing number on the basis of the particular trend.

4	16	8
3	9	6
7	?	14

- 1) 49 2) 26 3) 32 4) 24

Q.65 Find the term which belong to the group.

Wind, Air, Breath

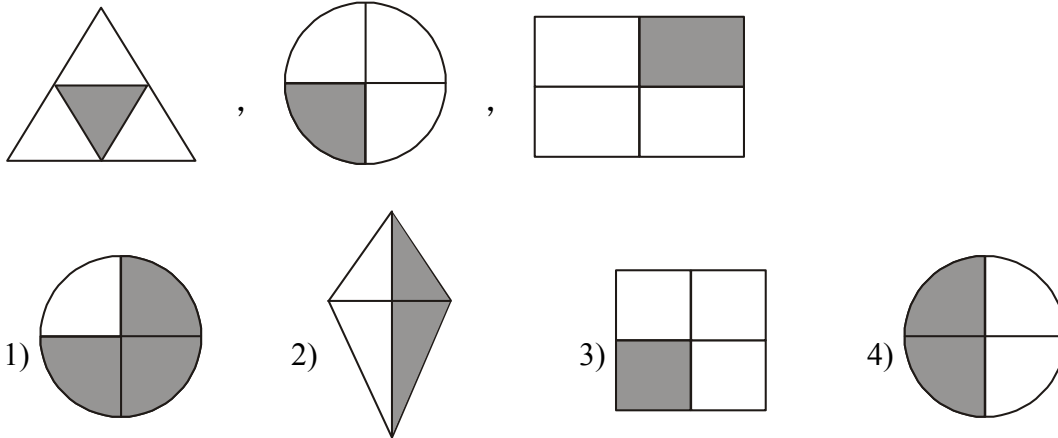
- 1) Cloud 2) Layer 3) Breeze 4) Water

Q.66 Find the term which belong to the group.

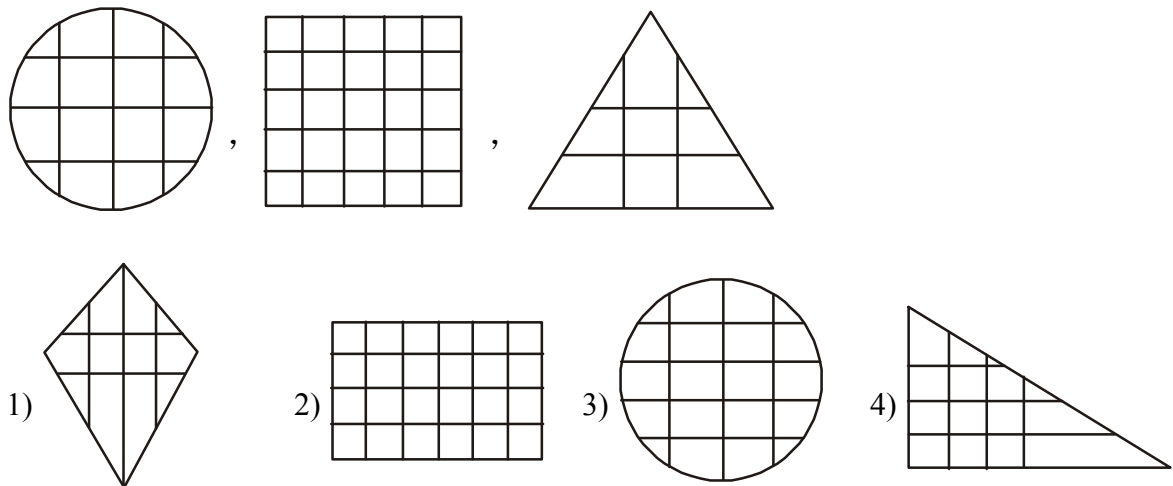
Biscuit, Bread, Khari

- 1) Pakoda 2) Cake 3) Panipuri 4) Paneer

Q.67 Find the diagram which belong to the group.



Q.68 Find the diagram which belong to the group.



Q.69 Find the term which belong to the group.

$$\frac{18}{9}, \frac{34}{17}, \frac{46}{23}$$

1) $\frac{24}{13}$

2) $\frac{38}{18}$

3) $\frac{16}{10}$

4) $\frac{42}{21}$

- Q.70** In a code, If $24 = 2164$, $31 = 361$, $52 = 5202$, then $33 = ?$
 1) 393 2) 3213 3) 3183 4) 3273
- Q.71** In a code, RARE = 5954, CUTE = 3874, DEAL = 6491 How will you write the word TEAR in this code?
 1) 7495 2) 7459 3) 4579 4) 7549

Q.72 Answer the question on the basis of the code given below.

H	G	R	F	P	A	E
⊙	△	□	+	×	÷	★

How will you write the word GRAPH ?

- 1) $\triangle \div \square \times \odot$ 2) $\triangle \square \times \div \odot$ 3) $\triangle \square \odot \div \times$ 4) $\triangle \square \div \times \odot$
- Q.73** $\star \div \square \div \circ$ Which number is formed from these symbols ?

□	△	★	+	÷	○	⊗
5	7	8	3	2	1	6

- 1) 8251 2) 82351 3) 82521 4) 82571
- Q.74** The door bell rings when all the family members are having dinner.
 1) Myself taking initiative to open the door. 2) Avoid the ringing of bell.
 3) I continue with my food. 4) Ask mother to open the door.

- Q.75** In the your society many people are suffering from dengue.
 1) Close my windows and door continuously.
 2) Ensure that there is no stag water in the surrounding.
 3) Apply mosquito repellent in own house.
 4) Avoid the sick people in the society.

